

Year 2 Autumn-Themed Maths Activity Booklet

Name: _____




Number bonds to 20

Draw a line to join pairs of pumpkins that go together to make 20.



Colour by Calculations

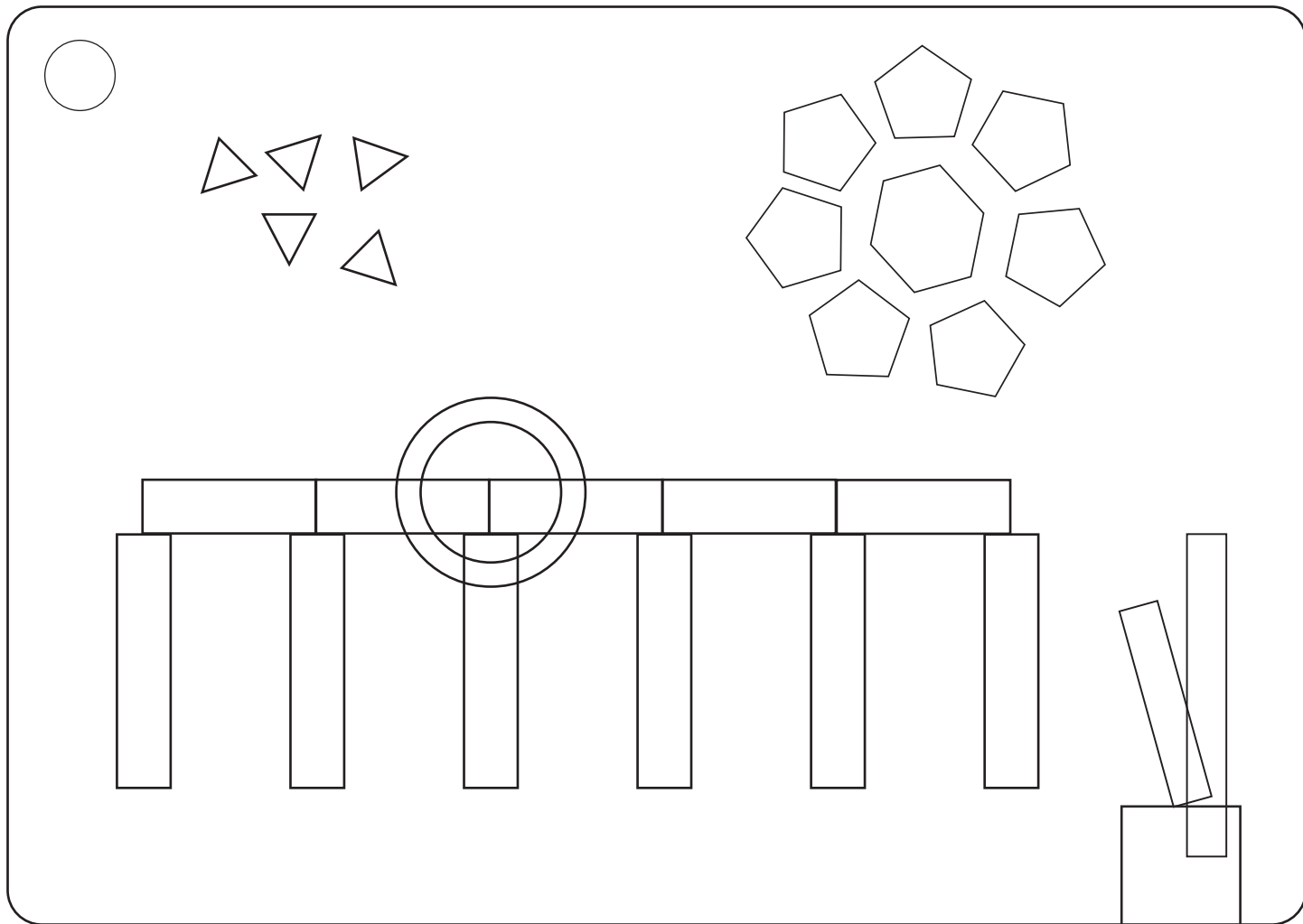
Use the key to colour the autumn themed picture.









Colour:	orange	yellow	green	brown	red
Answer:	1-10	11-20	21-30	31-40	41-50

2D Shape Picture


Count and colour the 2D shapes hidden in this autumn picture.



Counting in Multiples Dot to Dots

Count on in multiples to join the dots to complete the picture.



Multiplication Mosaic

Solve the calculations to reveal the hidden picture. Each answer has a special colour.

green = 0 to 8

orange = 9 to 120

		3×2	2×0	4×2	2×2				
			1×2	1×5	5×0				
				5×1	0×5				
		5×5	4×10	6×5	3×10	11×2	7×5	12×2	
	8×5	9×10	12×10	2×10	10×2	10×10	11×10	9×5	
5×8	2×12	10×2	8×10	11×5	5×10	7×10	3×5	6×2	10×5
2×8	10×5	8×2	4×5	9×2	7×5	5×3	5×8	2×5	2×11
10×4	2×9	12×10	6×2	5×9	2×10	7×2	11×10	4×5	2×7
	5×10	1×10	7×10	6×10	10×6	8×10	5×6	10×1	
		6×5	5×2	5×10	10×3	10×1	8×2		











I Spy and Count to 20

Count the autumn objects and write the numeral and number words.




I Spy and Count to 20

Count the number of autumn related items and write the numeral and number word in the box.


Object	Numeral	Number Word	Object	Numeral	Number Word
					
					
					
					
					


Ordinal Numbers


Label the fireworks with the correct ordinal number and ordinal number word to put them in the right order for the display.


7th
seventh







































Counting in 2s Maze

Help the combine harvester find the path through the wheat maze to the shed by counting on in 2s.



	8	10	12	2	8	2	8	
	2		14		10		12	
	14	4	16	18	20	46	4	
	26		22		22		34	
12	20	8	44	28	30	24	26	28
2		24		12		4		30
18	28	20	2	30	30	36	34	32
20		38		8		38		
2	26	40	6	30	28	40		
24		42		46		42		
2	6	40	46	12	18	52		



Autumn Code Breaker

Solve the calculations to crack the codes for the autumn-themed words.

a	b	c	d	e	f	g	h	i	j	k	l	m
10	1	20	6	11	23	18	25	13	2	16	21	9

n	o	p	q	r	s	t	u	v	w	x	y	z
24	17	12	26	3	19	15	8	7	14	22	4	5

	Answer	Letter
2×5		
$40 - 20$		
$11 + 6$		
$30 \div 10$		
6×4		

	Answer	Letter
$22 - 21$		
$12 + 5$		
12×2		
$12 + 11$		
$37 - 24$		
$15 \div 5$		
$110 \div 10$		

	Answer	Letter
$39 - 20$		
2×10		
$40 \div 4$		
$1 + 2$		
$19 + 4$		

	Answer	Letter
$50 - 25$		
$120 \div 12$		
3×5		




Autumn Code Breaker

	Answer	Letter
4×5		
$40 - 23$		
12×2		
$10 + 6$		
$22 \div 2$		
$2 + 1$		


	Answer	Letter
$13 + 10$		
$23 - 10$		
$50 - 47$		
$33 \div 3$		
$30 - 16$		
$30 - 13$		
$4 - 1$		
8×2		






Continue the Sequence







Place Value Code Breaker







In the number  , what is the value of the  ?




 =


In the number  , what is the value of the  ?

 =

In the number  , what is the value of the  ?

 =




In the number  , what is the value of the  ?

 =



Autumn Fractions

Colour the correct fractions of the fruits.

For each group of autumn animals, colour in $\frac{1}{2}$.






For each group of autumn animals, colour in $\frac{1}{4}$.



Autumn Fractions

For each group of autumn animals, colour in $\frac{1}{3}$.

		
---	--	---

Autumn Activities Board Game

You will need:




























- Counters
- A dice
- Pencil

Instructions

- Each player starts the game with 100 points.
- Take turns to throw the dice and move your counter around the board.
- When you land on a square, add or subtract the points on that square to or from your score.
- When a player reaches the finish, the player with the most points is the winner.

Keep track of your score here:

Name:	Name:	Name:	Name:
100	100	100	100

START	 + 13	 - 15				
		 + 7	 - 11	 + 15	 - 9	
FINISH					 + 12	
	 + 10	 - 3	 + 12	 - 15	 - 13	
			 + 10		 + 14	
 - 13	 + 14	 - 11	 + 16		 - 10	
 + 17					 + 16	
 - 4	 + 15	 - 8	 + 12	 - 9	 + 18	